

Learning outcomes from Lecture 3

- Be able to explain why confining a particle on a ring leads to quantization of its energy levels
- Be able to explain why the lowest energy of the particle on a ring is zero
- Be able to apply the particle on a ring approximation as a model for the electronic structure of a cyclic conjugated molecule (given equation for E_n).

Assumed knowledge

Be able to predict the number of π electrons and the presence of conjugation in a ring containing carbon and/or heteroatoms such as nitrogen and oxygen. Be able to convert between energy and spectroscopic units (J, eV, Hz and nm)

Chemistry 2

Lecture 4

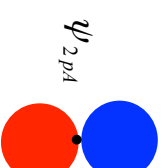
Quantitative MO Theory for Beginners:

Cyclic π Systems



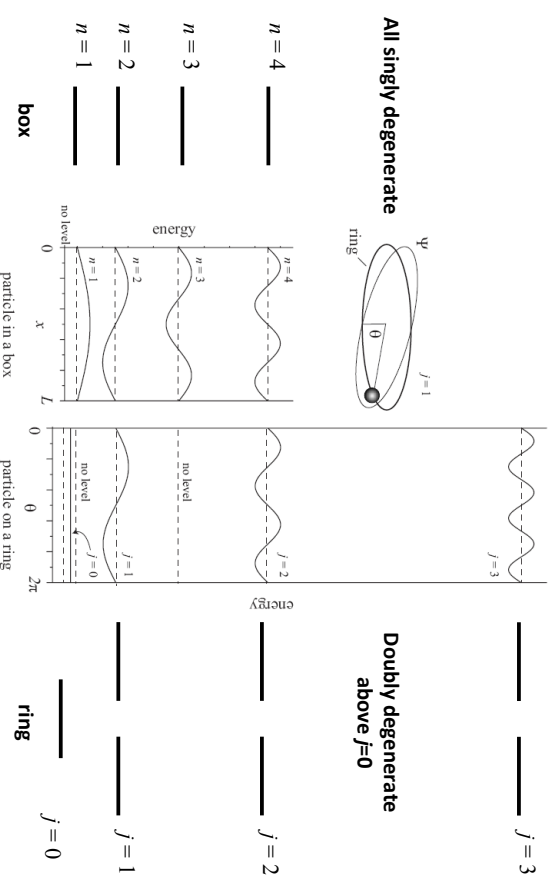
The Coulomb integral, α

α is known as the Coulomb integral and takes account of the self energy of an orbital and the attractive potential of the other nuclei. Since this is attractive, the Coulomb integral is **negative**. At large interatomic distances, the value of this integral is the atomic orbital energy, which is also negative.

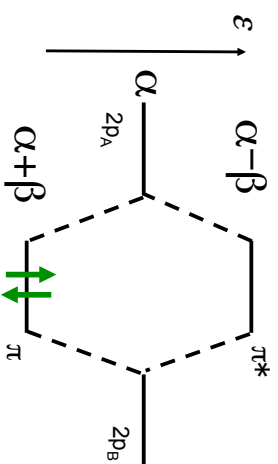


$$\alpha = \int \psi_{2pA} \hat{H} \psi_{2pA} d\tau = \int \psi_{2pB} \hat{H} \psi_{2pB}$$

“The particle on a ring”



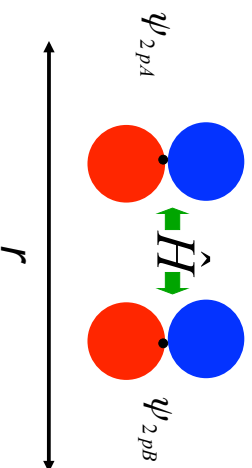
Interacting π orbitals



When two p-orbitals interact, they are split by 2β . The bonding orbital has an energy of $\alpha + \beta$, where both integrals are negative.

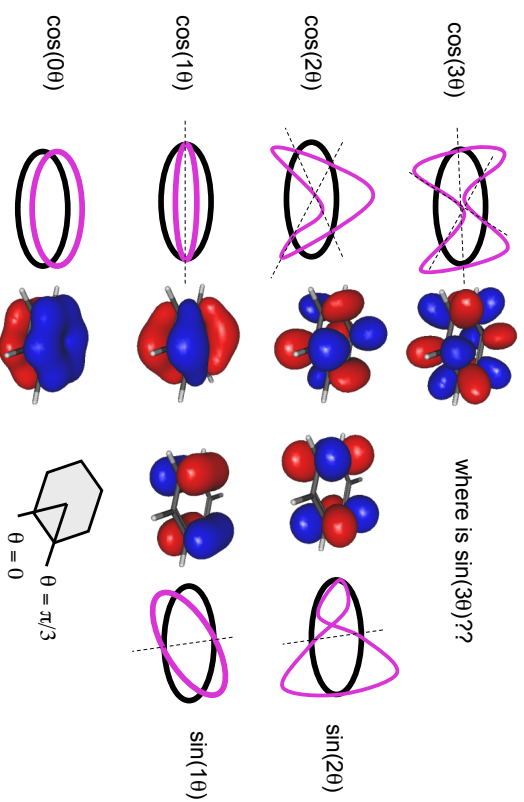
The Resonance integral, β

β is a measure of the strength of the bonding interaction as a result of the overlap of orbitals ψ_{2pA} and ψ_{2pB} . It is negative (attractive) where the orbitals constructively overlap, and is zero at large separation.

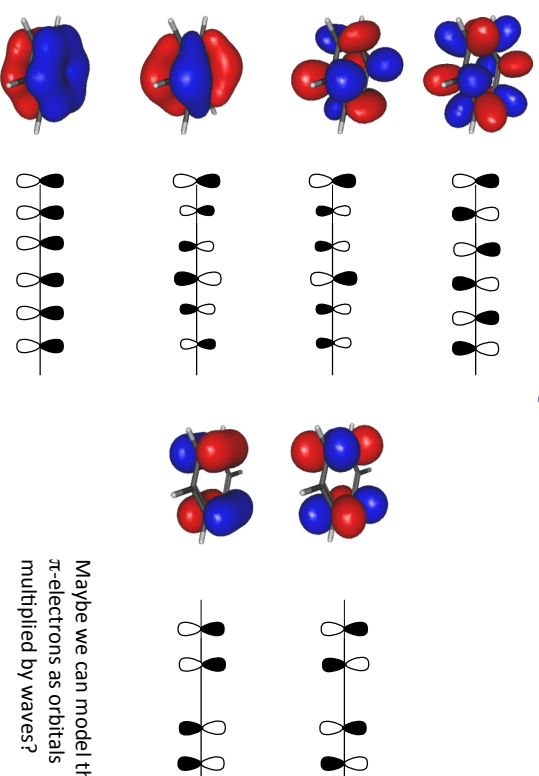


$$\beta = \int \psi_{2pA} \hat{H} \psi_{2pB} d\tau = \int \psi_{2pB} \hat{H} \psi_{2pA} d\tau$$

π MOs of Benzene



π MOs of Benzene



Maybe we can model the π -electrons as orbitals multiplied by waves?

orbital energies

Coefficients of p orbitals given by
Particle-on-a-ring wavefunction

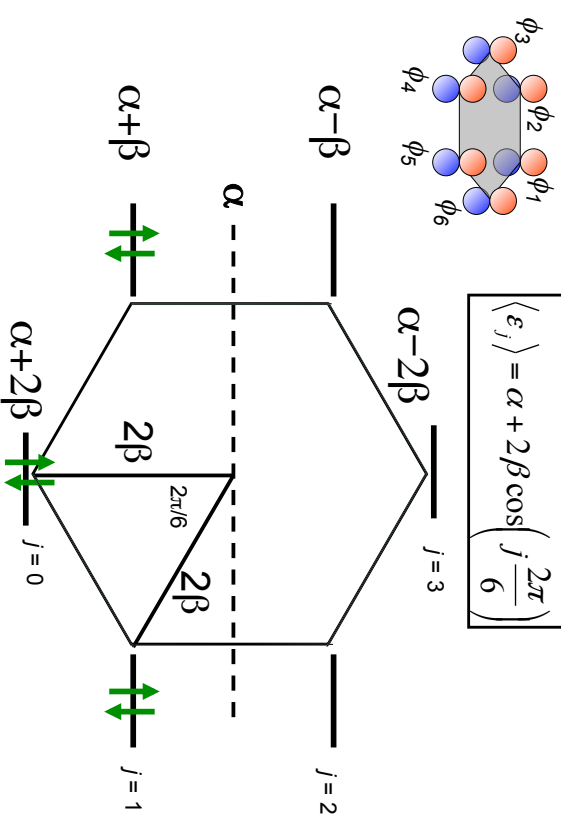
$$\begin{aligned} \langle \epsilon_j \rangle &= \int \Psi \hat{H} \Psi d\tau \\ &= \frac{1}{6} \int (c_1^* \phi_1 + c_2^* \phi_2 + \dots + c_6^* \phi_6) \hat{H} (c_1 \phi_1 + c_2 \phi_2 + \dots + c_6 \phi_6) d\tau \\ &= \alpha + 2\beta \cos\left(j \frac{2\pi}{6}\right) \end{aligned}$$

for benzene, see appendix for derivation

$$\langle \epsilon_j \rangle = \alpha + 2\beta \cos\left(j \frac{2\pi}{N}\right)$$

a geometrical mnemonic

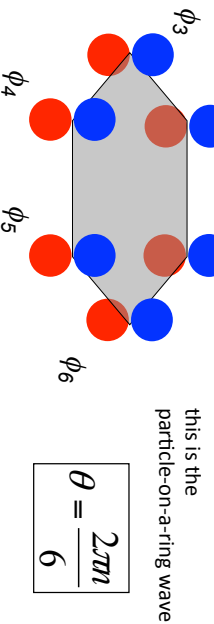
$$\langle \epsilon_j \rangle = \alpha + 2\beta \cos\left(j \frac{2\pi}{6}\right)$$



MOs on a ring

$$\Psi_j = \frac{1}{\sqrt{6}} \sum_{n=1}^6 \cos\left(j \frac{2\pi n}{6}\right) \phi_n$$

these are the unhybridized
2p orbitals



$$\theta = \frac{2\pi n}{6}$$

also

$$\Psi_j = \frac{1}{\sqrt{6}} \sum_{n=1}^6 \sin\left(j \frac{2\pi n}{6}\right) \phi_n$$

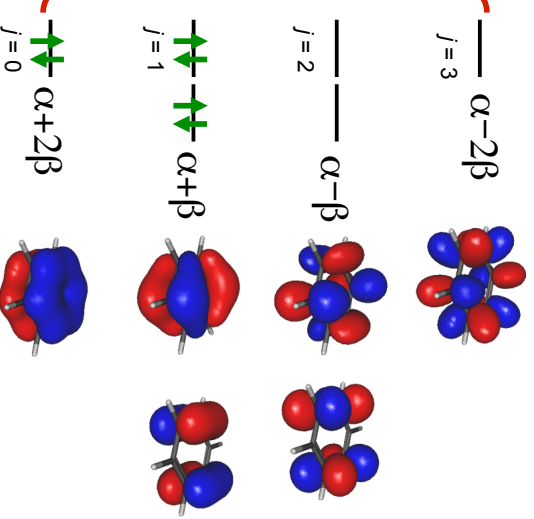
this is here to keep
the total
"probability" to 1

Construct MOs as atomic orbitals multiplied by the particle-on-a-ring wavefunctions.

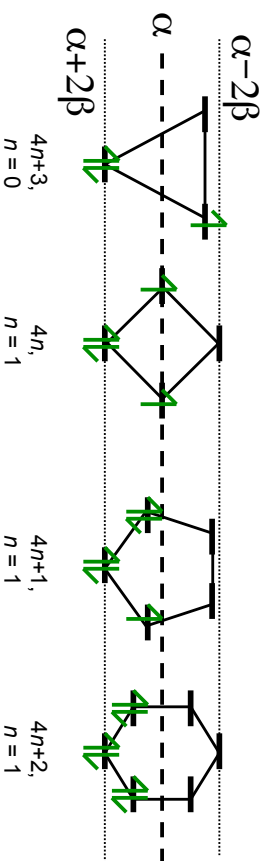
pi orbitals of benzene

$$\langle \epsilon_j \rangle = \alpha + 2\beta \cos\left(j \frac{2\pi}{6}\right)$$

The six p orbitals all
have the same energy
... interact and mix



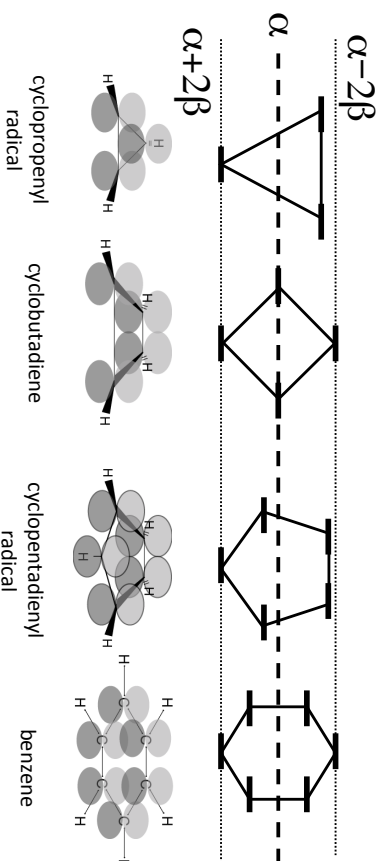
a geometrical mnemonic for N-membered rings centred at $\epsilon = \alpha$, radius = 2β



$4n+2$ membered rings are stable, and are referred to as *aromatic*.

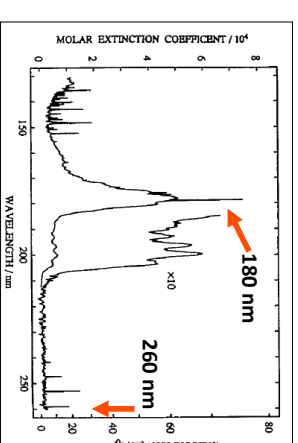
a geometrical mnemonic for N-membered rings

$$\langle \epsilon_j \rangle = \alpha + 2\beta \cos\left(j \frac{2\pi}{N}\right)$$



benzene

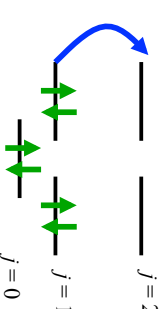
Question: from the calculated expression of the HOMO-LUMO transition, calculate an experimental value for the resonance integral β , taking
1) the intense transition in the figure for calibration,
2) the lowest energy transition for calibration.



Hiraga and Shobakate, J. Chem. Phys. 94, 7700 (1991)

Answer: The calculated energy of the HOMO-LUMO transition is -2β . This corresponds to photons of wavelength around 180 nm, for the intense transition, or 260nm for the lowest transition. Thus,

$$\begin{aligned} -2\beta &= hc/(180 \times 10^{-9}) \\ &= 1.10 \times 10^{-19} \text{ J} = 6.89 \text{ eV} \\ &1) \beta = -3.44 \text{ eV or} \\ &2) \beta = -2.38 \text{ eV} \end{aligned}$$



benzene

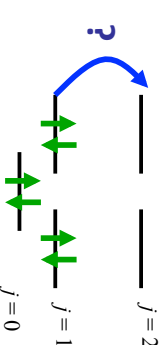
Question: what is the energy of the HOMO-LUMO transition, given the formula for the energy levels?

$$\langle \epsilon_j \rangle = \alpha + 2\beta \cos\left(j \frac{2\pi}{N}\right)$$

Answer: We find that the transition is from $j = 1$ to $j = 2$. Substituting,

$$\begin{aligned} \epsilon_1 &= \alpha + \beta \\ \epsilon_2 &= \alpha - \beta \\ \epsilon_2 - \epsilon_1 &= -2\beta \end{aligned}$$

The HOMO-LUMO transition is -2β .



annulenes

Question: Predict the lowest energy at which [18]-annulene might absorb strongly, given your smaller calculated value for β from benzene.

Answer: $\epsilon_j = \alpha + 2\beta \cos\left(j \frac{2\pi}{N}\right)$

$$\epsilon_4 = \alpha + 2\beta \cos\left(4 \frac{2\pi}{18}\right)$$

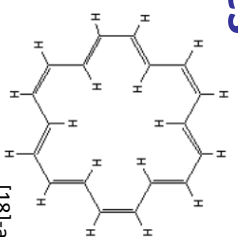
$$= \alpha + 0.347\beta$$

$$\epsilon_5 = \alpha - 0.347\beta$$

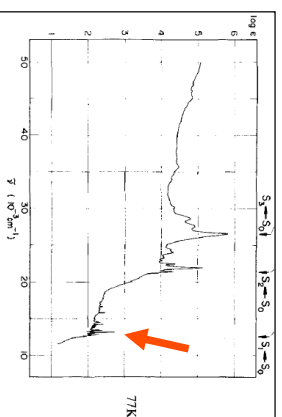
$$\epsilon_5 - \epsilon_4 = -0.695\beta$$

$$= 1.65 \text{ eV}$$

This corresponds to 750 nm, or 13300 cm^{-1} , which is a value supported by experiment.



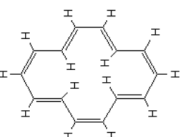
[18]-annulene



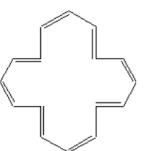
annulenes

Question: [14]-annulene and [16]-annulene are pictured. Which is aromatic?

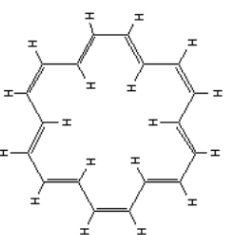
Answer: The $4n+2$ rule applies to [14]-annulene, $n=3$, but not [16]-annulene, which is *antiaromatic*.



[14]-annulene



[16]-annulene



[18]-annulene

Answer: There are 18 π -electrons, so the transition is from $j = 4$ to $j = 5$. (draw a picture)

Question: How many π -electrons in [18]-annulene? What are the values of j for the HOMO and the LUMO?

Next lecture

- Vibrational spectroscopy: the simple harmonic oscillator

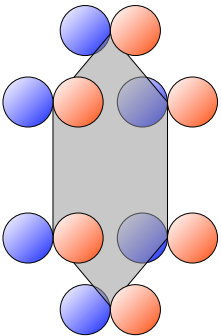
Week 10 tutorials

- Schrödinger equation and molecular orbitals for diatomic molecules

Learning outcomes

- Recall and apply the $4n+2$ rule for aromaticity
- Recognize and interpret the polygon mnemonic for the energy levels of a conjugated cyclic compound.
- Be able to apply molecular orbital theory as a model for the electronic structure of a conjugated ring molecule (given equation for E_j).

Appendix



The following is a derivation of the energy formula for molecular orbitals on a ring.

energies

$$\begin{aligned} \langle \epsilon \rangle &= \int \Psi^* \hat{H} \Psi d\tau \\ &= \frac{1}{6} \int \sum_{n=1}^6 \exp\left(-ij\frac{2\pi n}{6}\right) \phi_n^* \hat{H} \sum_{m=1}^6 \exp\left(ij\frac{2\pi m}{6}\right) \phi_m d\tau \\ &= \frac{1}{6} \int (c_1^* \phi_1 + c_2^* \phi_2 + c_3^* \phi_3 + c_4^* \phi_4 + c_5^* \phi_5 + c_6^* \phi_6) \hat{H} (c_1 \phi_1 + c_2 \phi_2 + c_3 \phi_3 + c_4 \phi_4 + c_5 \phi_5 + c_6 \phi_6) d\tau \end{aligned}$$

The interaction between an orbital and itself is α , the Coulomb integral.
The interaction between an orbital and an adjacent one is the Resonance integral, β .
The interaction between non-adjacent orbitals is ignored.

Practice Questions

1. Benzene absorbs at 260 nm, corresponding to the HOMO – LUMO transition.
 - (a) What is the spectroscopic value of β in eV and Joules.
 - (b) Calculate the total energy of the π electrons in benzene using this value
 - (c) An isolated C=C π bond has energy $\sigma + \beta$. What is the total energy of the π electrons in three C=C bonds
 - (d) Using your answer to (b) and (c), what is the aromatization energy?
2. Draw a circle and inscribe an equilateral triangle inside such that one vertex lies at the 6 o'clock position. The points at which the two figures touch are the π energy levels.
3. Repeat for 4, 5 and 6 membered rings.

complex wavefunctions

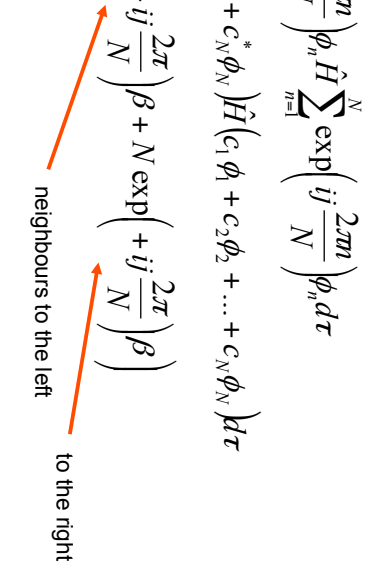
$$\exp(\pm ij\theta) = \cos(j\theta) \pm i \sin(j\theta)$$

$$\begin{aligned} \Psi_{\pm j} &= \frac{1}{\sqrt{6}} \sum_{n=1}^6 \exp\left(\pm ij\frac{2\pi n}{6}\right) \phi_n \\ \Psi_{\pm j}^* &= \frac{1}{\sqrt{6}} \sum_{n=1}^6 \exp\left(\mp ij\frac{2\pi n}{6}\right) \phi_n \end{aligned}$$

Since the sin and cos wavefunctions are degenerate, we may make linear combinations of these to make new solutions. It will simplify the mathematics to use these complex forms of the wavefunctions. We can now distinguish between the two degenerate solutions as Ψ_j , which is like going around the ring one way, or the other.

energies

$$\begin{aligned}\langle \varepsilon_j \rangle &= \frac{1}{N} \int \sum_{n=1}^N \exp\left(-ij \frac{2m\pi}{N}\right) \phi_n \hat{H} \sum_{n=1}^N \exp\left(ij \frac{2m\pi}{N}\right) \phi_n d\tau \\ &= \frac{1}{6} \int (c_1^* \phi_1 + c_2^* \phi_2 + \dots + c_N^* \phi_N) \hat{H} (c_1 \phi_1 + c_2 \phi_2 + \dots + c_N \phi_N) d\tau \\ &= \frac{1}{N} \left(N\alpha + N \exp\left(+ij \frac{2\pi}{N}\right) \beta + N \exp\left(+ij \frac{2\pi}{N}\right) \beta \right) \\ &= \alpha + 2\beta \cos\left(j \frac{2\pi}{N}\right)\end{aligned}$$

 neighbours to the left to the right

$$\boxed{\langle \varepsilon_j \rangle = \alpha + 2\beta \cos\left(j \frac{2\pi}{N}\right)}$$